


To Use:

Cut along the dotted lines on both pages. Pin the drinks on the board so that people can see them. Ask the team to match the units to the drinks. Once the team have agreed, mark any correct answers and repeat until all the answers are right.


Two Shots

50ml



3.6% Lager

One Pint



Champagne

125ml



Wine

175ml




5.2% Lager

One Pint



One Shot

25ml



Alcopop

275ml




Wine

250ml



Mojito

60ml Rum



1 Unit

1.5 Units

1.5 Units

2 Units

2 Units

2.1 Units

2.4 Units

3 Units

The Answers

1. Two Shots - 2 Units
2. 3.6% Lager - 2 Units
3. Champagne - 1.5 Units
4. 175ml Wine - 2.1 Units
5. 5.2% Beer - 3 Units
6. One Shot - 1 Unit
7. Alcopop - 1.5 Units
8. 250ml Wine - 3 Units
9. Mojito - 2.4 Units